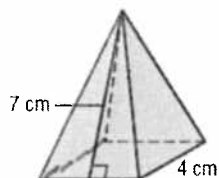


12-3 Skills Practice

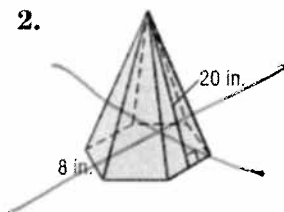
Surface Areas of Pyramids and Cones

Find the lateral area and surface area of each regular pyramid. Round to the nearest tenth if necessary.

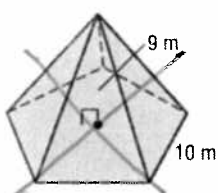
1.



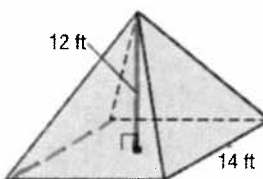
2.



3.

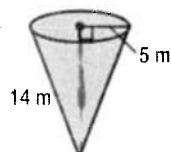


4.

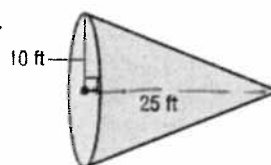


Find the lateral area and surface area of each cone. Round to the nearest tenth.

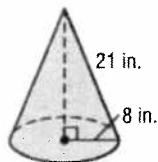
5.



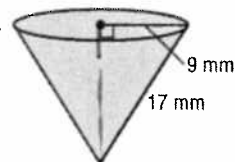
6.



7.



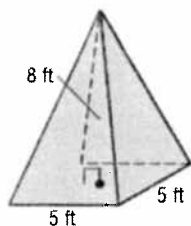
8.



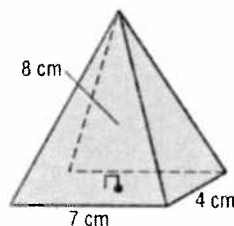
12-5 Skills Practice**Volumes of Pyramids and Cones**

Find the volume of each pyramid or cone. Round to the nearest tenth if necessary.

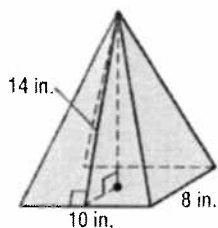
1.



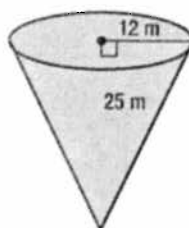
2.



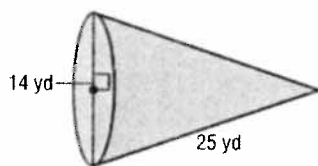
3.



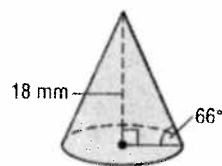
4.



5.

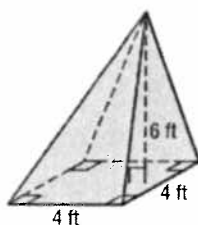


6.



Find the volume of each oblique pyramid or cone. Round to the nearest tenth if necessary.

7.



8.

